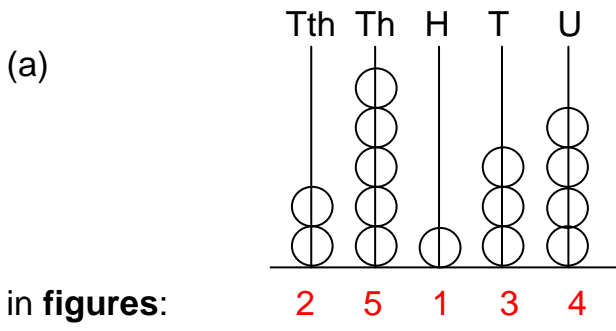


Grade 5

Maths

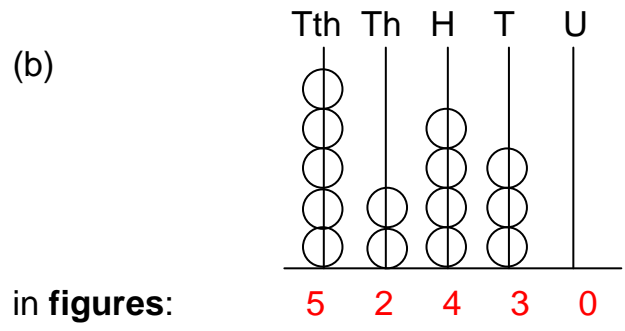
Numeration and Notation

1. Write the number shown on the abacus:



in figures:

in words: Twenty five thousand one
hundred and thirty four



in figures:

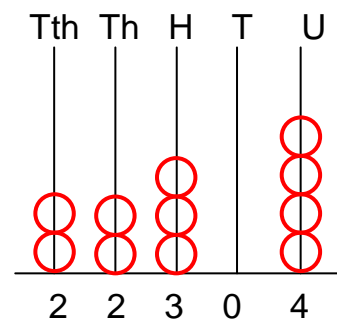
in words: Fifty two thousand four hundred
and thirty

2. Arrange in **ascending** order.

51 234 , 12 345 , 34 512 , 23 451 , 45 123 .

12 345 , 23 451 , 34 512 , 45 123 , 51 234 .

3. Complete the abacus.



4. Complete:

(a) $37\ 851 = (\underline{3} \times 10\ 000) + (\underline{7} \times 1\ 000) + (\underline{8} \times 100) + (\underline{5} \times 10) + (\underline{1} \times 1)$

(b) $34\ 291 = \underline{2}$ hundreds + $\underline{1}$ units + $\underline{4}$ thousands + $\underline{3}$ ten thousands + $\underline{9}$ tens

(c) $59\ 423 = 50\ 000 + \underline{9\ 000} + \underline{400} + \underline{20} + \underline{3}$.